


Name Icebergs on EPIC


Directions: Illustrate 3 facts from the nonfiction text.

# State *the* Facts


1



2



3



## Adding 3-digit numbers in columns (no regrouping)

---

### Grade 3 Addition Worksheet

Find the sum.

$$\begin{array}{r} 1. \quad 545 \\ + 331 \\ \hline \\ \hline \end{array}$$

$$\begin{array}{r} 2. \quad 703 \\ + 155 \\ \hline \\ \hline \end{array}$$

$$\begin{array}{r} 3. \quad 623 \\ + 13 \\ \hline \\ \hline \end{array}$$

$$\begin{array}{r} 4. \quad 453 \\ + 411 \\ \hline \\ \hline \end{array}$$

$$\begin{array}{r} 5. \quad 449 \\ + 230 \\ \hline \\ \hline \end{array}$$

$$\begin{array}{r} 6. \quad 216 \\ + 121 \\ \hline \\ \hline \end{array}$$

$$\begin{array}{r} 7. \quad 611 \\ + 100 \\ \hline \\ \hline \end{array}$$

$$\begin{array}{r} 8. \quad 71 \\ + 717 \\ \hline \\ \hline \end{array}$$

$$\begin{array}{r} 9. \quad 222 \\ + 442 \\ \hline \\ \hline \end{array}$$

$$\begin{array}{r} 10. \quad 356 \\ + 520 \\ \hline \\ \hline \end{array}$$

$$\begin{array}{r} 11. \quad 570 \\ + 211 \\ \hline \\ \hline \end{array}$$

$$\begin{array}{r} 12. \quad 801 \\ + 63 \\ \hline \\ \hline \end{array}$$

$$\begin{array}{r} 13. \quad 419 \\ + 340 \\ \hline \\ \hline \end{array}$$

$$\begin{array}{r} 14. \quad 405 \\ + 100 \\ \hline \\ \hline \end{array}$$

$$\begin{array}{r} 15. \quad 158 \\ + 710 \\ \hline \\ \hline \end{array}$$

$$\begin{array}{r} 16. \quad 525 \\ + 420 \\ \hline \\ \hline \end{array}$$

$$\begin{array}{r} 17. \quad 113 \\ + 480 \\ \hline \\ \hline \end{array}$$

$$\begin{array}{r} 18. \quad 861 \\ + 120 \\ \hline \\ \hline \end{array}$$

$$\begin{array}{r} 19. \quad 740 \\ + 41 \\ \hline \\ \hline \end{array}$$

$$\begin{array}{r} 20. \quad 746 \\ + 151 \\ \hline \\ \hline \end{array}$$

## Adding 2-digit numbers in columns (no regrouping)

---

### Grade 2 Addition Worksheet

Find the sum.

$$\begin{array}{r} 1) \quad 33 \\ + 30 \\ \hline \\ \hline \end{array}$$

$$\begin{array}{r} 2) \quad 20 \\ + 21 \\ \hline \\ \hline \end{array}$$

$$\begin{array}{r} 3) \quad 78 \\ + 0 \\ \hline \\ \hline \end{array}$$

$$\begin{array}{r} 4) \quad 80 \\ + 19 \\ \hline \\ \hline \end{array}$$

$$\begin{array}{r} 5) \quad 39 \\ + 50 \\ \hline \\ \hline \end{array}$$

$$\begin{array}{r} 6) \quad 28 \\ + 30 \\ \hline \\ \hline \end{array}$$

$$\begin{array}{r} 7) \quad 43 \\ + 14 \\ \hline \\ \hline \end{array}$$

$$\begin{array}{r} 8) \quad 33 \\ + 25 \\ \hline \\ \hline \end{array}$$

$$\begin{array}{r} 9) \quad 52 \\ + 17 \\ \hline \\ \hline \end{array}$$

$$\begin{array}{r} 10) \quad 13 \\ + 2 \\ \hline \\ \hline \end{array}$$

$$\begin{array}{r} 11) \quad 19 \\ + 10 \\ \hline \\ \hline \end{array}$$

$$\begin{array}{r} 12) \quad 31 \\ + 35 \\ \hline \\ \hline \end{array}$$

$$\begin{array}{r} 13) \quad 11 \\ + 58 \\ \hline \\ \hline \end{array}$$

$$\begin{array}{r} 14) \quad 51 \\ + 33 \\ \hline \\ \hline \end{array}$$

$$\begin{array}{r} 15) \quad 6 \\ + 70 \\ \hline \\ \hline \end{array}$$

$$\begin{array}{r} 16) \quad 45 \\ + 21 \\ \hline \\ \hline \end{array}$$

$$\begin{array}{r} 17) \quad 49 \\ + 40 \\ \hline \\ \hline \end{array}$$


$$\begin{array}{r} 18) \quad 26 \\ + 40 \\ \hline \\ \hline \end{array}$$

$$\begin{array}{r} 19) \quad 43 \\ + 51 \\ \hline \\ \hline \end{array}$$


$$\begin{array}{r} 20) \quad 58 \\ + 20 \\ \hline \\ \hline \end{array}$$

Name: Grade 2

My Number



Draw it with Base Ten Blocks




Write It!

\_\_\_\_\_

\_\_\_\_\_

\_\_\_\_\_

Tally It!



Before

My Number

After

--	--	--	--	--	--	--

Words: \_\_\_\_\_

# Number of the Day:

Even or Odd?

Gr. 3

Hundreds	Tens	ones



Build with Base 10 Blocks

Write the number in expanded form:

\_\_\_\_\_ + \_\_\_\_\_ + \_\_\_\_\_ =

10 more	
10 less	
100 more	
100 less	

